

ENTRANCE EXAM

CLASS-III

Time: 2 Hrs

MM: 100

Instructions:

1. All questions are compulsory.
2. All questions must be answered in the question booklet itself in the space provided for this purpose.
3. All sub-questions under the main question carry equal marks.
4. Rough work, if required, may be done on the last few pages of this question booklet, provided for the purpose.

Part-A (English)

30 Marks

Question No.	Question	Space for Answer
1.	Complete the sentences by choosing out of given words (music, uniform, lights , armor, chairs , shoes, cricket, furniture): (5)	
a)	The soldier wears a _____.	
b)	An electrician repairs _____.	
c)	A musician plays _____.	
d)	A carpenter makes _____.	
e)	A cobbler mends _____.	
2.	Fill in the blank with words in box to form correct phrase in the space provided: (mouse, squirrel, feather, knife, sun, ice, bee, almond, pen) (5)	
a)	As quiet as a _____	

Question No.	Question	Space for Answer
b)	As busy as a _____	
c)	As light as a _____	
d)	As sharp as a _____	
e)	As cold as _____	
3.	Write the plural of the following words: (5)	
a)	Baby	
b)	Man	
c)	Butterfly	
d)	Ox	
e)	Tooth	
4.	Write the word of the opposite gender in the following : (5)	
a)	Father	
b)	Prince	
c)	Uncle	
d)	Waiter	
e)	King	
5.	Identify and write the NOUN in the following sentences: (5)	
a)	Ram is a good boy.	
b)	I have a bicycle	
c)	I live in Delhi.	

Question No.	Question	Space for Answer
--------------	----------	------------------

d)	Tigers are wild animals.	
e)	I love to read books.	
6.	Fill in the blanks with articles 'a' , 'an' or 'the' in the space provided: (5)	
a)	My mother bought ___ umbrella.	
b)	Don't make ___ noise.	
c)	A cat hid under ___ table.	
d)	Would you like to have ___ chocolate?	
e)	We saw ___ tiger in the jungle.	

Part-B (Maths)

30 Marks

Question No.	Question	Space for Answer
1.	Find the answer for the following (5)	
a)	Place value of 0 in the number 1054 is	
b)	Add [157 + 62 = _____]	
c)	Subtract [76 - 15 = _____]	
d)	If today is Sunday, and I tell you to meet me day after tomorrow, on what day should you meet me?	
e)	How many sides does a quadrilateral have?	
2.	Identify the rule and fill in the blanks (5)	
a)	2, 6, 10, _____?	

Question No.	Question	Space for Answer
b)	16, 19, 22, ___ ?	
c)	23, 19, 15 ___ ?	
d)	5, 15, 25, ___ ?	
e)	↑, ↓, ⇒, ↑, ↓, ___ ?	
3.	Answer the following: (5)	
a)	Write the numbers in ascending order: 145, 184, 112, 296	
b)	Write the numbers in descending order: 154, 48, 113, 269	
c)	Write the odd numbers between 75 and 85	
d)	Write the prime numbers between 5 and 15	
e)	Put >, < or = sign in the blank space $60 + 7$ _____ 48	
4.	Find the answer: (5)	
a)	$4 + 5 = 3 +$ _____	
b)	_____ $+ 5 = 8 + 2$	
c)	$10 + 5 = 20 -$ _____	
d)	3 Tens + 5 Ones = _____	
e)	_____ Tens + _____ Ones = 84	
5.	Answer the following (5)	
a)	How many months have 30 days in a year? How many days are there in a leap year?	

Question No.	Question	Space for Answer
--------------	----------	------------------






b)	In your class, 15 students like red colour and 12 students like blue colour and 20 students like green colour. If 4 students do not like any color, calculate the number of students in your class, who like a colour.	
6.	Complete the following tables: (5)	
a)	$7 \times 7 = ?$	
b)	$6 \times 8 = ?$	
c)	$5 \times 7 = ?$	
d)	$4 \times 9 = ?$	
e)	$9 \times 7 = ?$	






Part-C (Social Science)

20 Marks

Question No.	Question	Space for Answer
1.	Fill in the blanks (5)	
a)	The road must be crossed at the _____ crossing.	
b)	People should stand in a _____ on the bus stop.	
c)	Agricultural workers are the people who work in _____.	
d)	Trees shed their leaves in the _____ season.	
e)	Muslims worship in the _____.	

Question No.	Question	Space for Answer
--------------	----------	------------------

2.	Write TRUE or FALSE (5)	
a)	We should follow safety rules to avoid accidents.	
b)	We use room heater during summer season.	
c)	Rainy season is also known as the Monsoons.	
d)	Earth is the fourth planet from the Sun in our Solar System.	
e)	Bees collect pollen grains from flowers and turn into honey.	
3.	Write what these symbols stands for: (5)	
a)	 This means _____	
b)	 This means _____	
c)	 This means _____	
d)	 This house is called _____	
e)	 This house is called _____	
4.	Write a paragraph on monsoon season between 60 to 75 words. (5)	
<hr/> <hr/> <hr/> <hr/> <hr/>		

Question No.	Question	Space for Answer
d)	Who built the Taj Mahal? (Shah Jahan/Akbar/Jahangir)	
e)	Which out of below is an amphibian? (Fish/ Sea Horse/ Frog)	
2.	Write TRUE or FALSE: (5)	
a)	Fishes have gills to breathe.	
b)	The food we eat is digested in the heart.	
c)	Sardar Vallabhbhai Patel is known as the Father of the Nation.	
d)	A ball kept on table showing all countries on the earth is known as Wikipedia.	
e)	Pratibha Patil was the first lady President of India.	
3.	Identify the pictures and write their names: (5)	
a)	 This is a _____	
b)	 This is a _____	
c)	 This is a _____	
d)	 This is a _____	
e)	 This is a _____	
4.	Write the Capital of the following States: (5)	
a)	West Bengal	
b)	Telangana	
c)	Goa	

Question No.	Question	Space for Answer
--------------	----------	------------------

d)	Kerela	
e)	Uttarakhand	

SPACE FOR ROUGH WORK